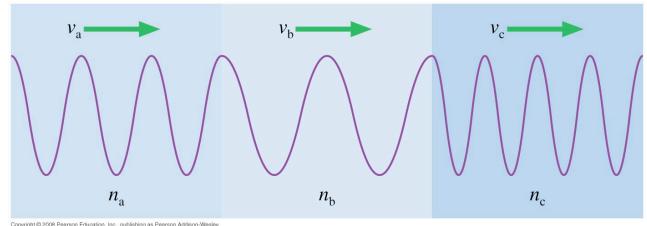
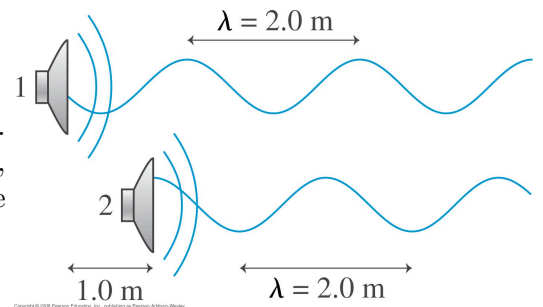




- (2 points) What is the phase difference between the crest of a wave and the adjacent trough?
  - $-2\pi$  rad
  - 0 rad
  - $\pi/4$  rad
  - $\pi/2$  rad
  - $\pi$  rad
  - $3\pi$  rad
- (3 points) A light wave travels through three transparent materials of equal thickness. Rank in order, from largest to smallest, the indices of refraction  $n_a$ ,  $n_b$  and  $n_c$

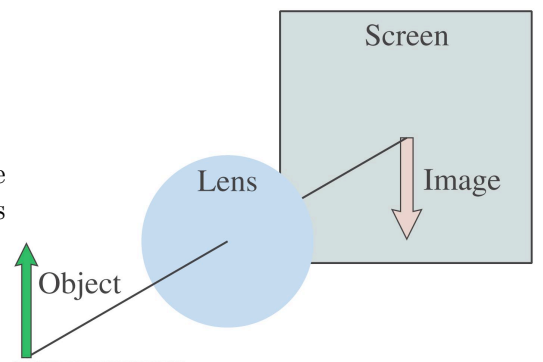


- (3 points) Two loudspeakers emit waves with  $\lambda = 2.0\text{m}$ . Speaker 2 is  $1.0\text{m}$  in front of speaker 1. What, if anything, can be done to cause constructive interference between the two waves?



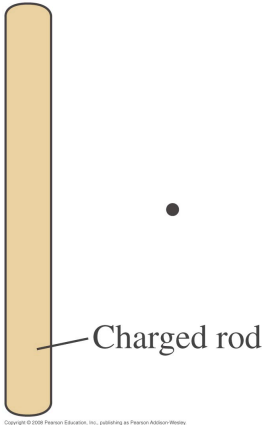
- Move speaker 1 to the right  $1.0\text{m}$
- Move speaker 1 to the right  $0.5\text{m}$
- Move speaker 1 to the left  $0.5\text{m}$
- Move speaker 1 to the left  $1.0\text{m}$
- Nothing. This situation already causes constructive interference.
- Constructive interference is not possible for any placement.

- (3 points) A lens produces a sharply focused, inverted image on a screen. What will you see on the screen if the lens is removed?

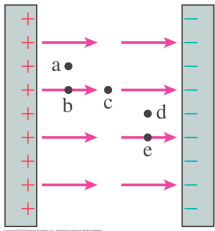


- The image will be inverted and blurry.
  - The image will be upright and sharp.
  - The image will be upright and blurry
  - The image will be dimmer but otherwise unchanged.
  - There will be no image at all.
- (4 points) An electroscope is positively charged by touching it with a positive glass rod. The electroscope leaves spread apart and the glass rod is removed. Then a negatively charged plastic rod is brought close to the top of the electroscope, but it doesn't touch. What happens to the leaves?
    - The leaves get closer together.
    - The leaves spread further apart.
    - One leaf moves higher, the other lower.
    - The leaves don't move.

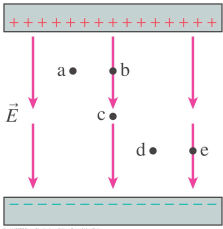
6. (3 points) Which of the following actions will increase the electric field strength at the position of the dot? (multiple answers allowed)
- (a) Make the rod longer without changing the charge.
  - (b) Make the rod shorter without changing the charge.
  - (c) Make the rod wider without changing the charge.
  - (d) Add charge to the rod.
  - (e) Remove charge from the rod.
  - (f) Move the dot farther from the rod.
  - (g) Move the dot closer to the rod.



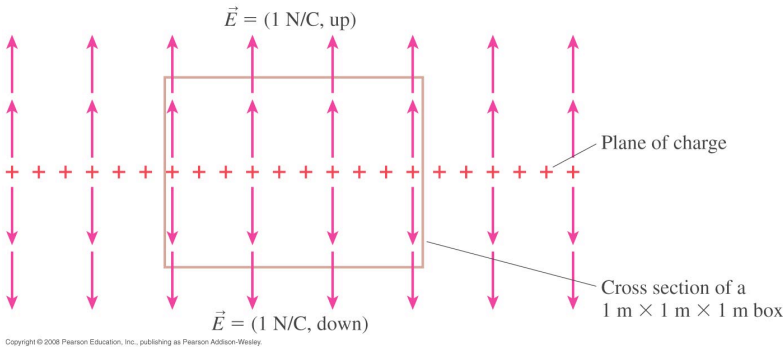
7. (3 points) Rank in order, from largest to smallest, the forces  $F_a$  to  $F_e$  a proton would experience if placed at points  $a$  to  $e$  in this parallel plate capacitor.



8. (3 points) Rank in order, from largest to smallest, the potentials  $V_a$  to  $V_e$  at points  $a$  to  $e$  in this parallel plate capacitor.



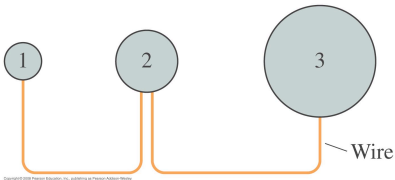
9. (4 points) The total electric flux through this box is
- (a)  $0Nm^2/C$
  - (b)  $1Nm^2/C$
  - (c)  $2Nm^2/C$
  - (d)  $3Nm^2/C$
  - (e)  $4Nm^2/C$
  - (f)  $6Nm^2/C$
  - (g)  $8Nm^2/C$



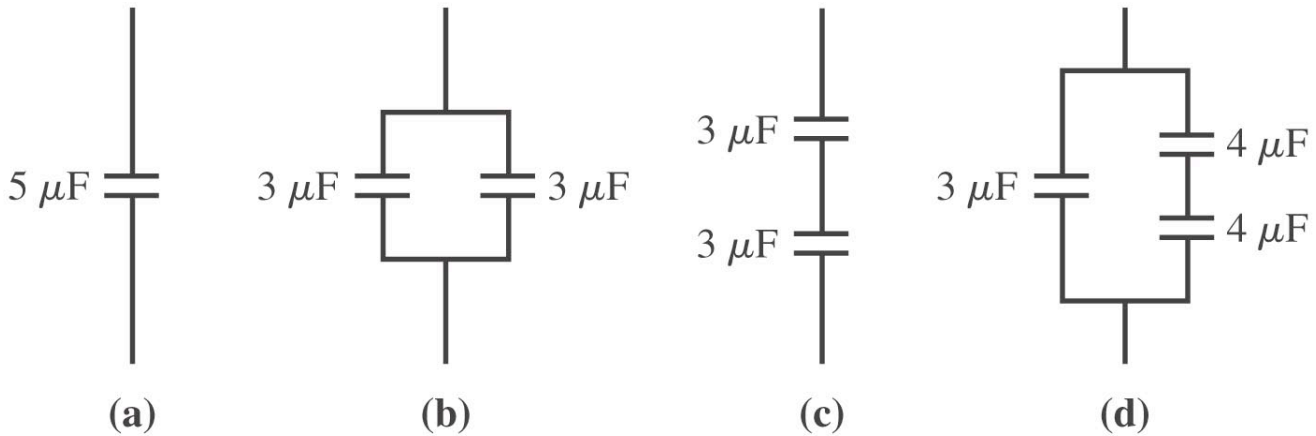
10. (3 points) Rank in order, from largest to smallest, the potential energies  $U_a$  to  $U_d$  of these 4 pairs of charges. Each + symbol represents the same amount of charge.



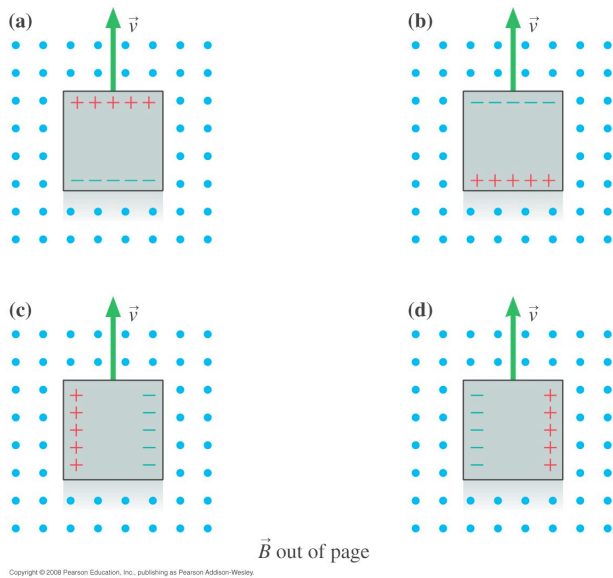
11. (4 points) Three charged metal spheres of different radii are connected by a thin metal wire. Which describes the potential and electric field at the surface of each sphere?
- (a)  $V_1 = V_2 = V_3$  and  $E_1 = E_2 = E_3$
  - (b)  $V_1 = V_2 = V_3$  and  $E_1 > E_2 > E_3$
  - (c)  $V_1 > V_2 > V_3$  and  $E_1 = E_2 = E_3$
  - (d)  $V_1 > V_2 > V_3$  and  $E_1 > E_2 > E_3$
  - (e)  $V_3 > V_2 > V_1$  and  $E_3 = E_2 = E_1$
  - (f)  $V_3 > V_2 > V_1$  and  $E_3 = E_2 = E_1$



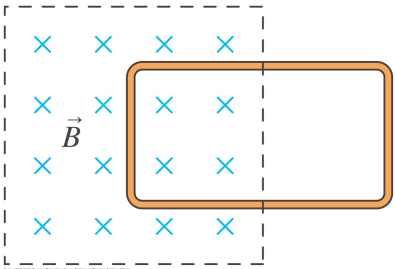
12. (4 points) Rank in order, from largest to smallest, the equivalent capacitance  $(C_{eq})_a$  to  $(C_{eq})_d$  of circuits a to d



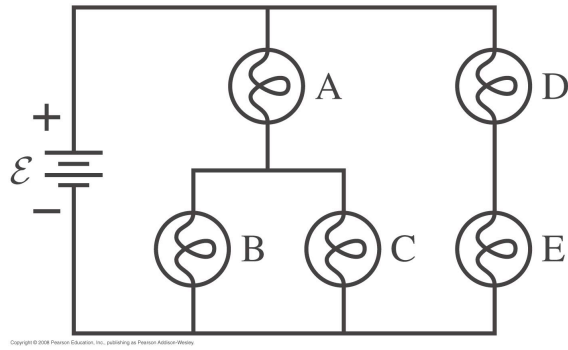
13. (3 points) A square conductor moves through a uniform magnetic field. Which of the figures below show the correct charge distribution on the conductor?



14. (4 points) A conducting loop is halfway into a magnetic field. Suppose the magnetic field begins to increase rapidly in strength. What happens to the loop?
- (a) The loop is pushed upwards, toward the top of the page
  - (b) The loop is pushed downwards, towards the bottom of the page
  - (c) The loop is pulled to the left.
  - (d) The loop is pushed to the right.
  - (e) The tension in the wires increases but the loop does not move.



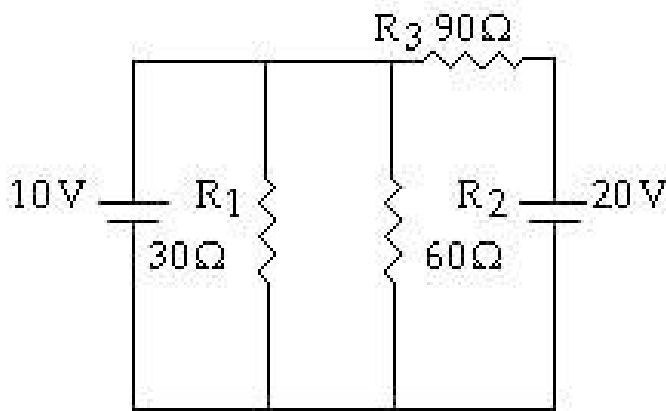
15. (4 points) The figure below shows 5 identical lightbulbs connected to an ideal battery. All the bulbs are glowing. Rank the bulbs in order, from brightest to dimmest.



16. (10 points) Two identical converging lenses of focal lengths  $f = f' = 15\text{cm}$  are separated by a distance  $d = 6\text{cm}$ . A luminous source is placed a distance  $o = 10\text{cm}$  from the first lens. (a) draw a ray-tracing diagram of this situation (b) Calculate the position of the final image.

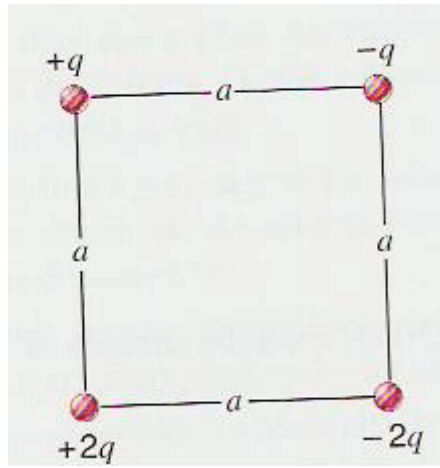
17. (10 points) Suppose you are listening to the radio (CBC radio 1 - 690kHz) at your home, 10km from the radio broadcast tower. There is another building halfway between you and the tower at some distance from the straight-line path between you and the tower. How far off the straight-line path is the building (at minimum) if destructive interference occurs between the direct and reflected waves? (assume equal amplitudes and no phase shifts on reflection)

18. (10 points) Find the current through resistor  $R_1$  in the circuit below.





19. (10 points) In the figure below find (a) the horizontal component and (b) the vertical component of the resultant electric force on the charge in the lower left corner of the square. Assume that  $q = 1.13\mu\text{C}$  and  $a = 15.3\text{cm}$ . The charges are at rest.



20. (10 points) The figure below shows a mass spectrometer; an analytical instrument used to identify the various molecules in a sample by measuring their charge-to-mass ratio  $e/m$ . The sample is ionized, the positive ions are accelerated (starting from rest) through a potential difference  $\Delta V$ , and they enter a region of uniform magnetic field. The field bends the ions into circular trajectories, but after just half a circle they either strike the wall or pass through a small opening to a detector. As the accelerating voltage is slowly increased, different ions reach the detector and are measured. Typical design values are a magnetic field strength  $B = 0.200T$  and a spacing between the entrance and exit holes  $d = 8.00cm$ . What accelerating potential difference  $\Delta V$  is required to detect (a)  $N_2^+$  ions (b)  $O_2^+$  ions and (c)  $CO^+$  (note on masses of atoms:  $C = 12.0000u$ ,  $N = 14.0031u$ ,  $O = 15.9949u$ .  $1u = 1.661 \times 10^{-27}kg/u$ )

