

Electricity & Magnetism

Lecture 3: Electric Flux and Field Lines

Today's Concepts:

A) Electric Flux

B) Field Lines



Gauss' Law

History and Visualizations

Mechanical Universe: <https://youtu.be/wq9TjQZDrAA>

Browser App: https://phet.colorado.edu/sims/html/charges-and-fields/latest/charges-and-fields_en.html

Your Comments

What the heck is epsilon not? -

Actually it's "episilon naught"

IT'S JUST A
CONSTANT

$$\vec{E} = k \frac{q}{r^2} \hat{r}$$

$$\vec{E} = \frac{1}{4\pi\epsilon_o} \frac{q}{r^2} \hat{r}$$

$$k \equiv \frac{1}{4\pi\epsilon_o}$$

$$k = 9 \times 10^9 \text{ N m}^2 / \text{C}^2$$

$$\epsilon_o = 8.85 \times 10^{-12} \text{ C}^2 / \text{N}\cdot\text{m}^2$$

I don't understand electric flux, how it's derived and the formula. I also need someone to explain ϵ_o or ϵ not. Cause I don't know what that is.

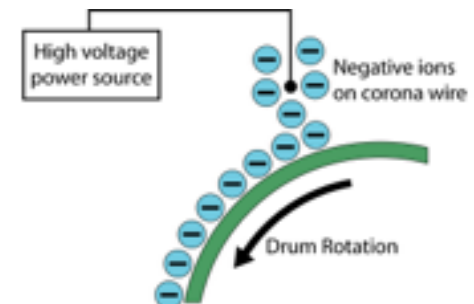
$$\epsilon_0 = \frac{1}{4\pi k_c}$$

"Calculating Electric Field from Arc of Charge!" [\[hint\]](#)

"Why is gauss' law so important? Why is flux a useful value?"

more comments

- Does the permittivity of free space depend on the type of matter the field lines are going through? So in a non-conductor there are fewer field lines or no field lines making it through?
 - ϵ_0 is for a vacuum. For materials we use $\epsilon > \epsilon_0$. \rightarrow E is less
- the relation of integration with these equation. What remains constant and what is changing and a example of where in the real world this is used would solidify this concept of Gauss law
 - Xerography, Electrostatic Air Cleaner



A big comment...

We'll skip checkpoint questions most ppl get right.

Many examples will have symbols, not numbers.

My Comments

- You will need to understand integrals in this course!!!
- Forces and Fields are Vectors
- Always Draw a Picture First. What do the Forces/Fields Look Like?

Prelecture



Infinite line of charge

$$\vec{E} = \int k \frac{dq}{r^2} \hat{r}$$

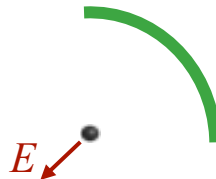
WORKS FOR ALL!

Homework




Finite line of charge
(constant λ)

Homework



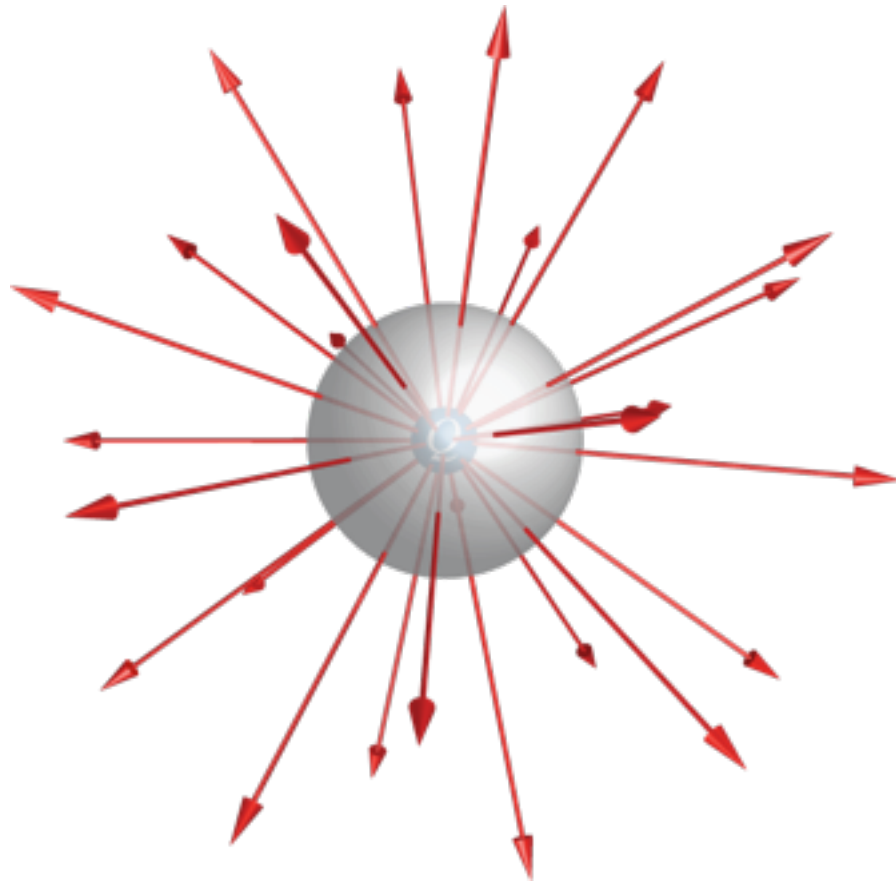
Arc of charge (constant λ)

Exam?



Finite line of charge
(non-constant λ)

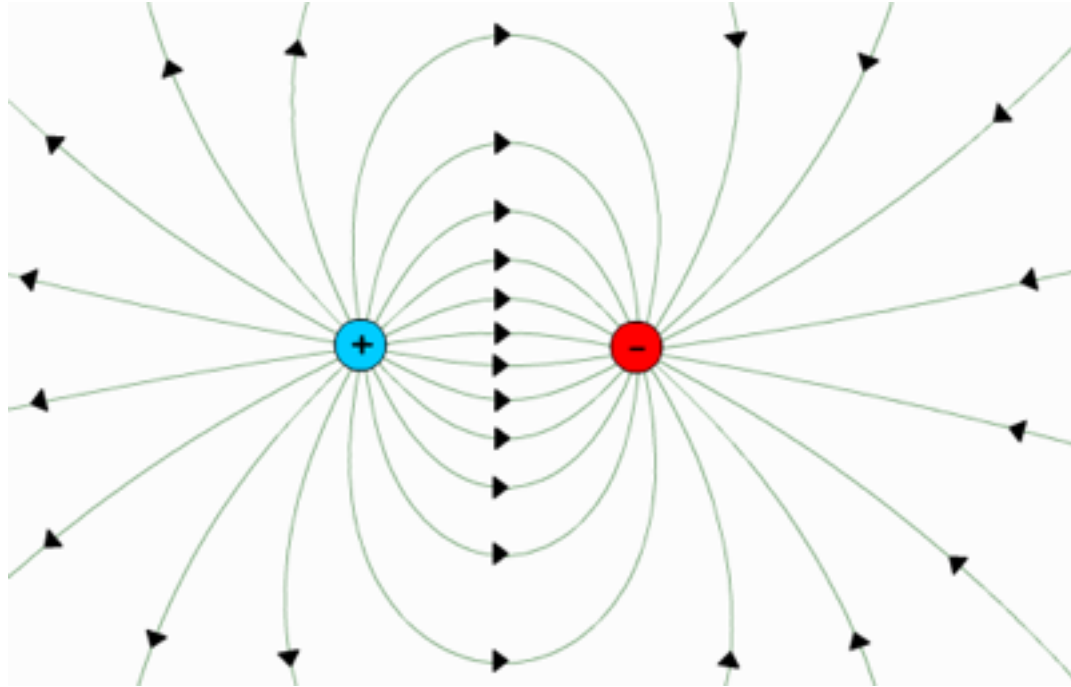
Electric Field Lines



Direction & Density of Lines
represent
Direction & Magnitude of E

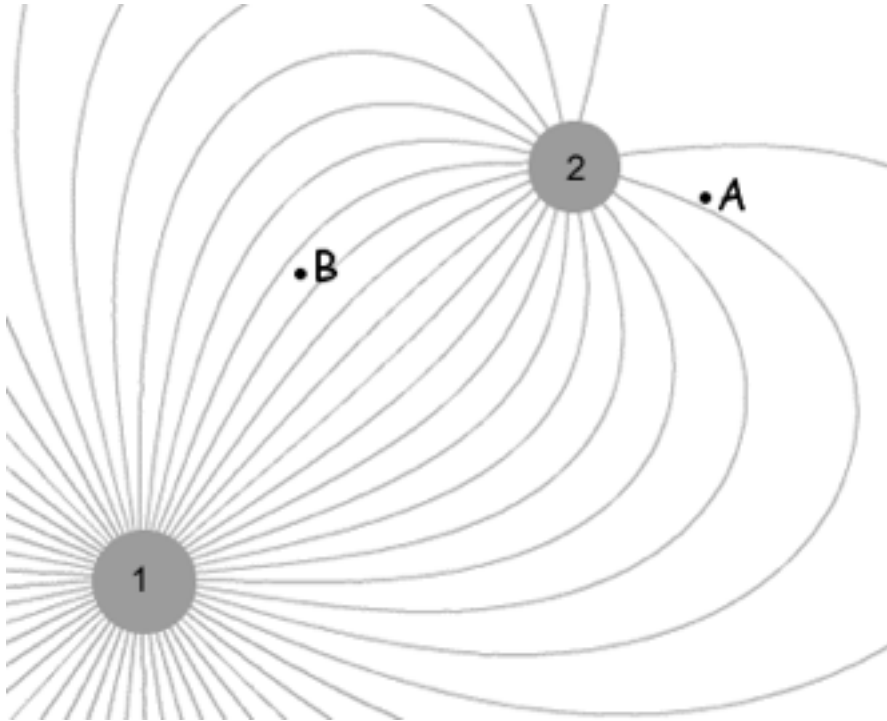
Point Charge:
Direction is radial
Density $\propto 1/R^2$

Electric Field Lines



Dipole Charge Distribution:
Direction & Density
much more interesting.

CheckPoint: Field Lines - Two Point Charges 1



Compare the magnitudes of the two charges

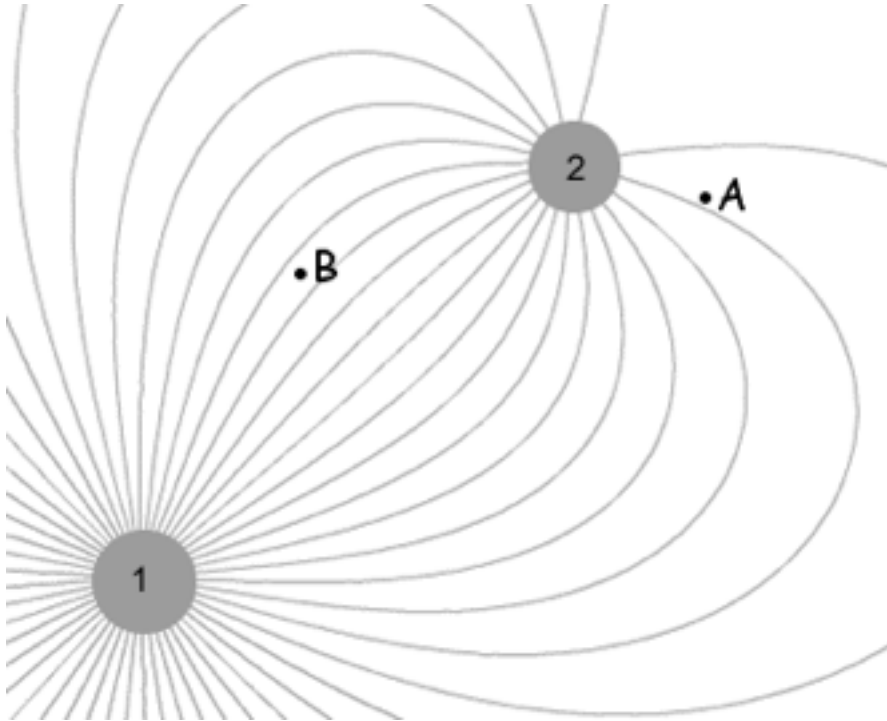
A) $|Q_1| > |Q_2|$

B) $|Q_1| = |Q_2|$

C) $|Q_1| < |Q_2|$

D) There is not enough information to determine the relative magnitudes of the charges.

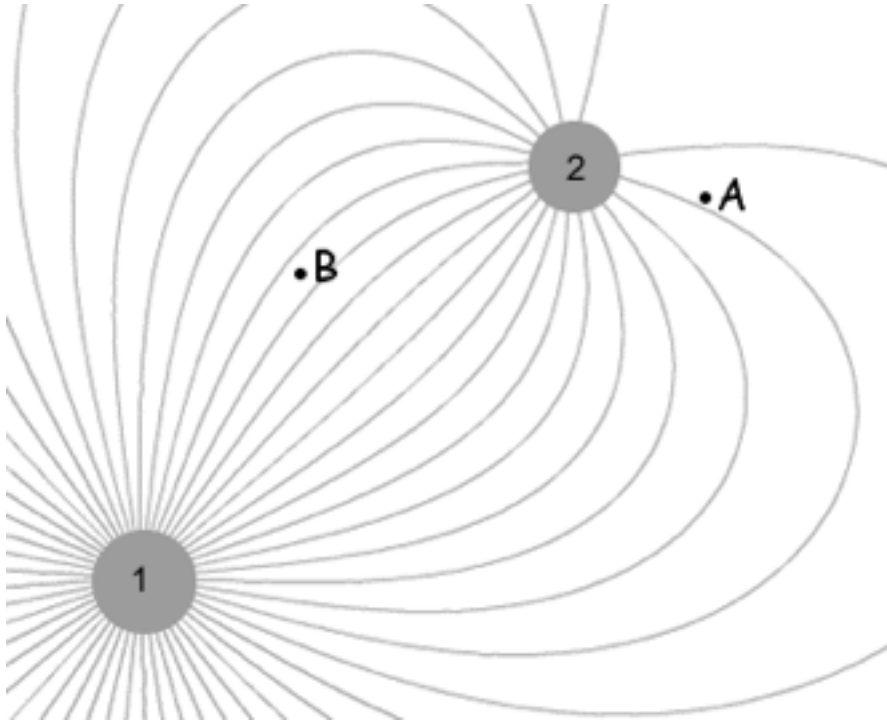
CheckPoint: Field Lines - Two Point Charges 2



What do we know about the signs of the charges from looking at the picture?

- A) Q_1 and Q_2 have the same sign
- B) Q_1 and Q_2 have opposite signs
- C) There is not enough information in the picture to determine the relative signs of the charges
- D) gns of the charges

CheckPoint: Field Lines - Two Point Charges 3

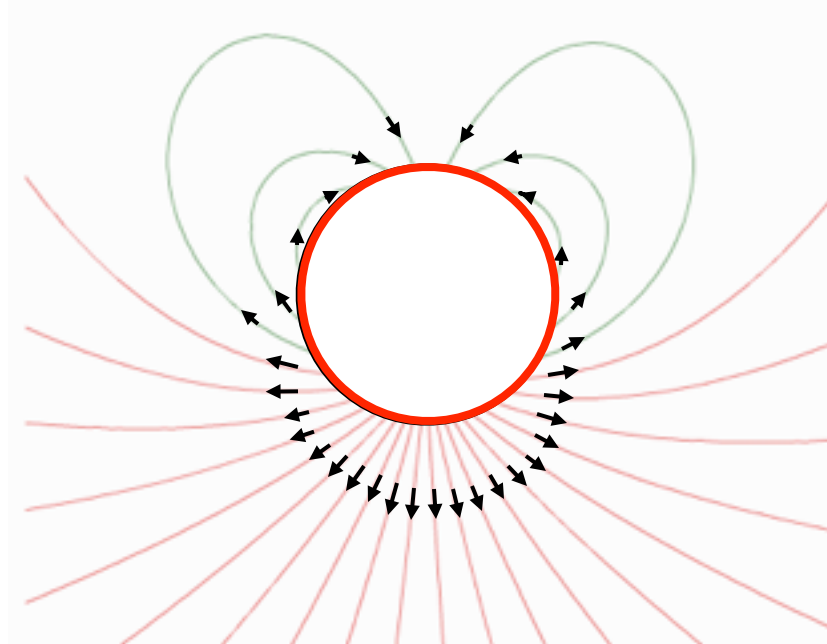


Compare the magnitudes of the electric fields at points A and B.


- A) $|E_A| > |E_B|$
- B) $|E_A| = |E_B|$
- C) $|E_A| < |E_B|$
- D) There is not enough information to determine the relative magnitudes of the fields at A and B.

Point Charges

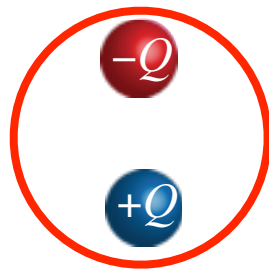
“Telling the difference between positive and negative charges while looking at field lines. Does field line density from a certain charge give information about the sign of the charge?”



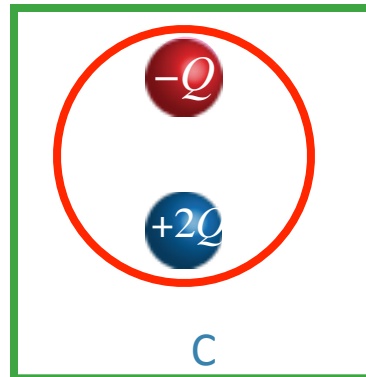
What charges are inside the red circle?




A




B



C



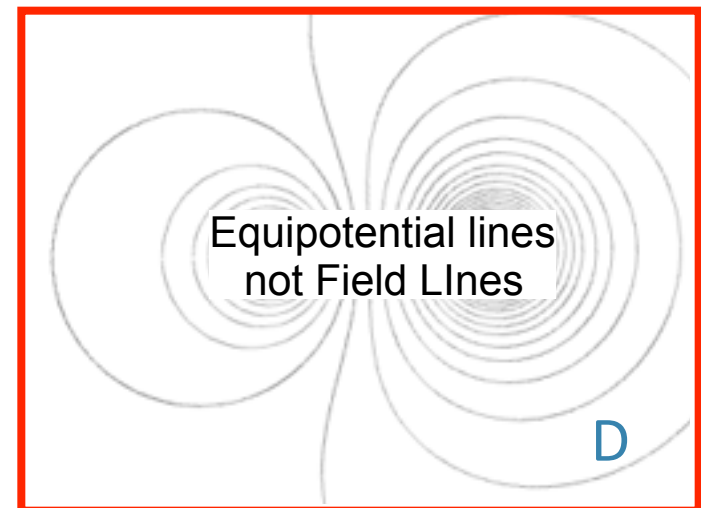
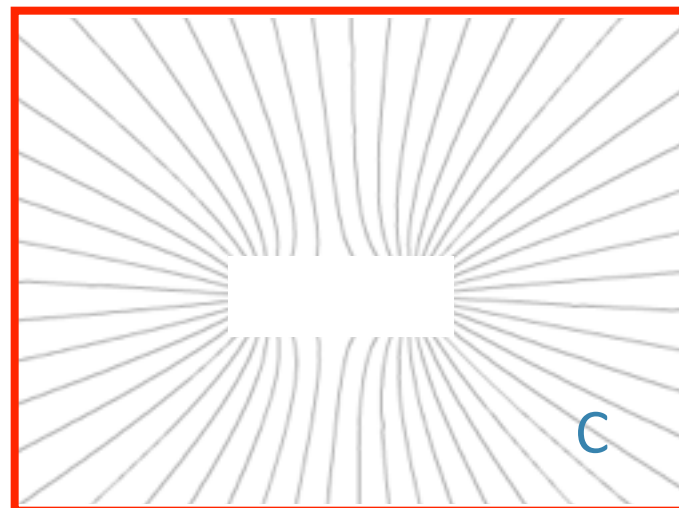

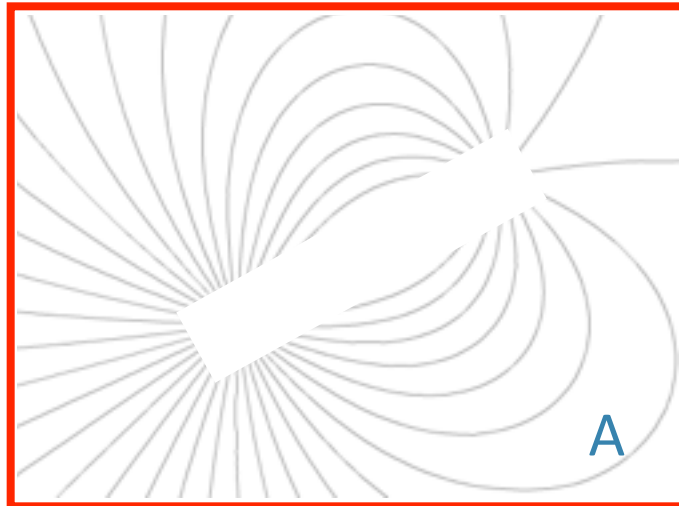
D



E

Clicker Question: Same Sign, Diff. Magnitudes

Which of the following field line pictures best represents the electric field from two charges that have the **same** sign but **different** magnitudes?



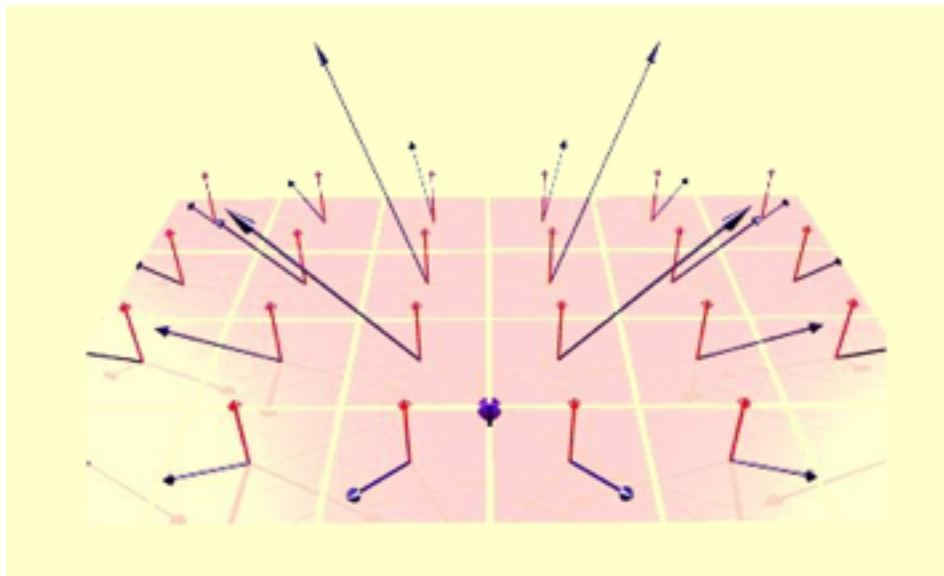
Electric Flux “Counts Field Lines”

“I’m very confused by the general concepts of flux through surface areas. please help”

Flux through
surface S

$$\Phi_S = \int_S \vec{E} \cdot d\vec{A}$$

Integral of $\vec{E} \cdot d\vec{A}$
on surface S




CheckPoint: Flux from Uniformly Charged Rod

An infinitely long charged rod has uniform charge density of λ , and passes through a cylinder (gray). The cylinder in case 2 has twice the radius and half the length compared to the cylinder in case 1.

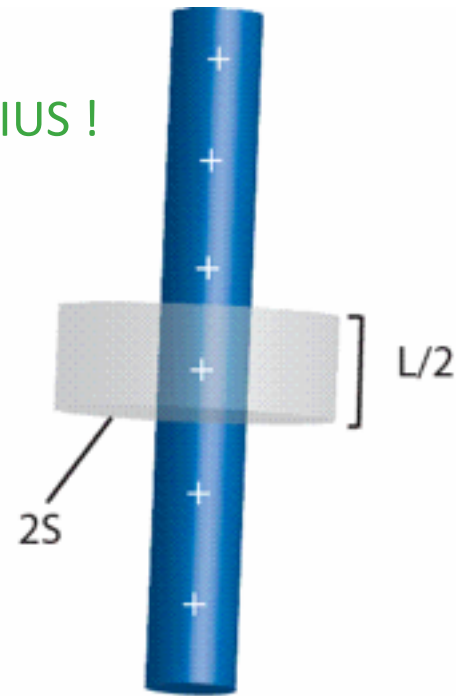
Compare the magnitude of the flux through the surface of the cylinder in both cases.

- A. $\Phi_1 = 2 \Phi_2$
- B. $\Phi_1 = \Phi_2$
- C. $\Phi_1 = 1/2 \Phi_2$
- D. None of these

TAKE s TO BE RADIUS !



Case 1



Case 2

CheckPoint Results: Flux Unif. Charged Rod

Compare the magnitude of the flux through the surface of the cylinder in both cases.

A. $\Phi_1 = 2 \Phi_2$

B. $\Phi_1 = \Phi_2$

C. $\Phi_1 = 1/2 \Phi_2$


D. None of these

The first cylinder encloses twice the amount of charge as the second

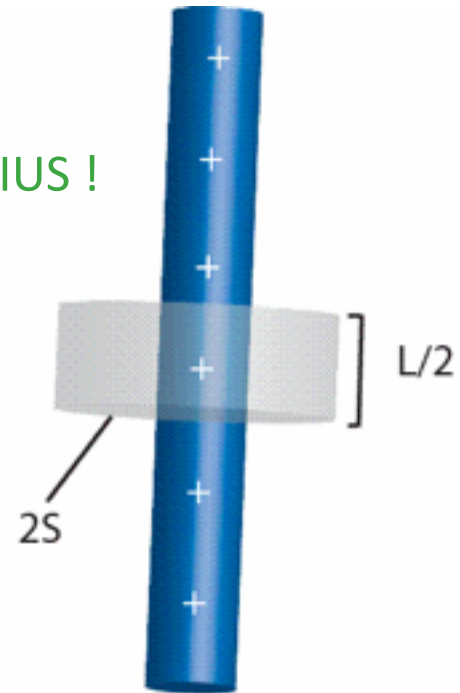
flux doesn't depend on length or radius

because case 1 have more surface area that is parallel to the electric field line than case 2 so case 2 is half case 1

TAKE s TO BE RADIUS !

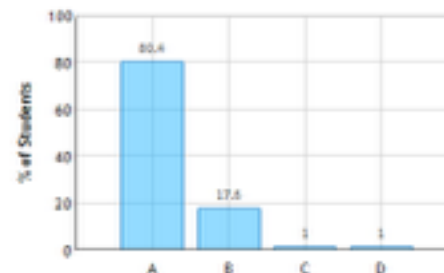


Case 1



Case 2

Flux from Uniformly Charged Rod: Question 1
(N = 102)



CheckPoint Results: Flux Unif. Charged Rod

“The flux is proportional to the Area that the field is passing through. Although the radius is twice as long in the second case, it's length is half as long. Both cases have the same surface area that the field passes through, ~~so the fluxes are equal.~~”

$$\Phi_S = \int_S \vec{E} \cdot d\vec{A}$$

E constant on barrel of cylinder
E perpendicular to barrel surface
 (*E* parallel to *dA*)

$$\Phi = E \int_{\text{barrel}} d\vec{A} = EA_{\text{barrel}}$$

Case 1

$$E_1 = \frac{\lambda}{2\pi\epsilon_0 s}$$



$$\Phi_1 = \frac{\lambda L}{\epsilon_0}$$

Case 2

$$E_2 = \frac{\lambda}{2\pi\epsilon_0 (2s)}$$

$$A_2 = (2\pi (2s))L / 2 = 2\pi sL$$



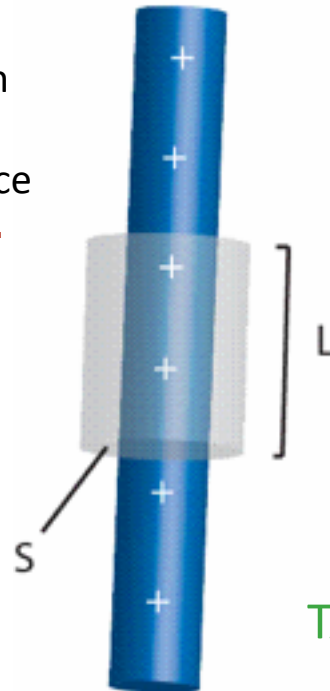
$$\Phi_2 = \frac{\lambda(L/2)}{\epsilon_0}$$

$$\text{A. } \Phi_1 = 2 \Phi_2$$

$$\text{B. } \Phi_1 = \Phi_2$$

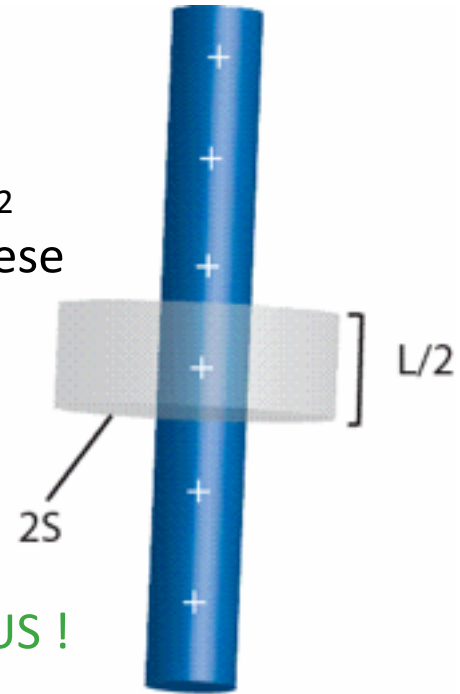
$$\text{C. } \Phi_1 = 1/2 \Phi_2$$

D. None of these



Case 1

TAKE *s* TO BE RADIUS !

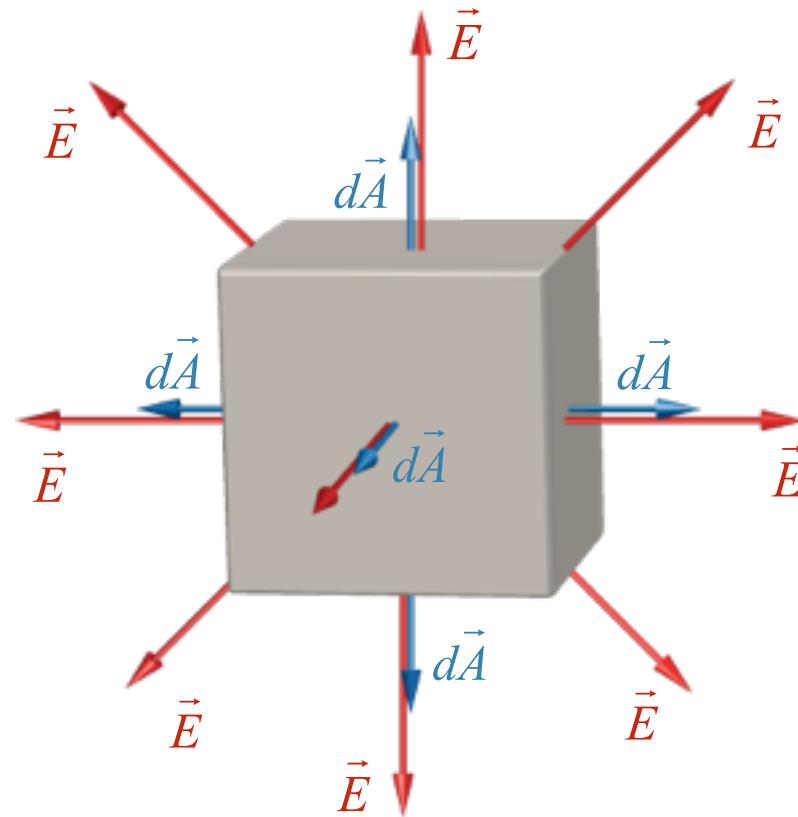


Case 2

RESULT: GAUSS' LAW

Φ proportional to charge enclosed !

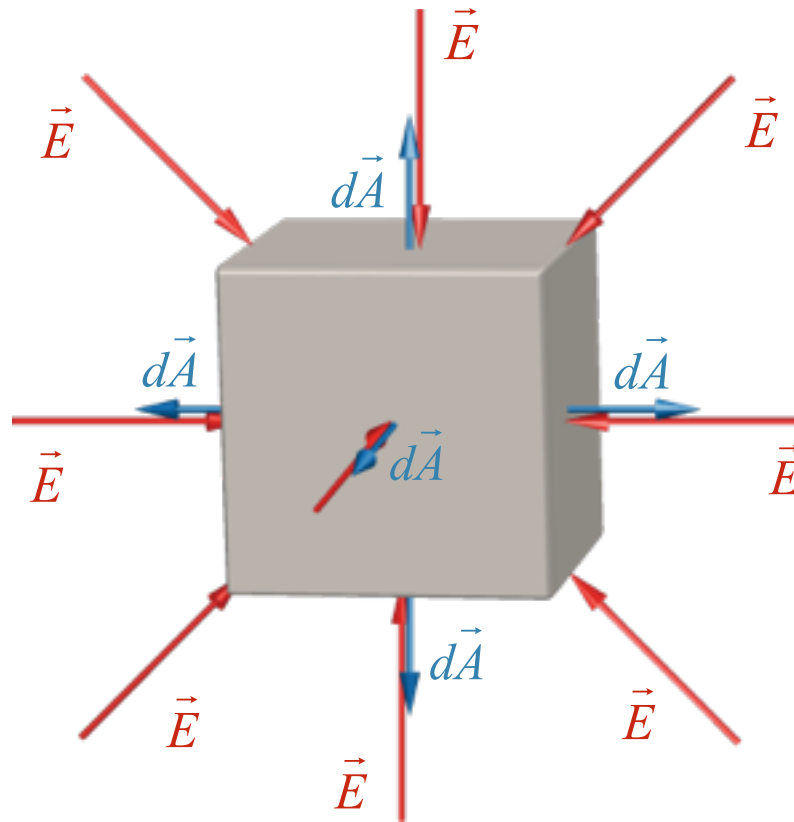
Direction Matters:



For a closed surface,
 $d\vec{A}$ points outward

$$\Phi_S = \int_S \vec{E} \cdot d\vec{A} = \frac{Q_{\text{enclosed}}}{\epsilon_0}$$

Direction Matters:



For a closed surface,
 $d\vec{A}$ points outward

$$\Phi_S = \oint_S \vec{E} \cdot d\vec{A} < 0$$

Clicker Question: Trapezoid in Constant Field



$$\vec{E} = E_0 \hat{i}$$

Label faces:

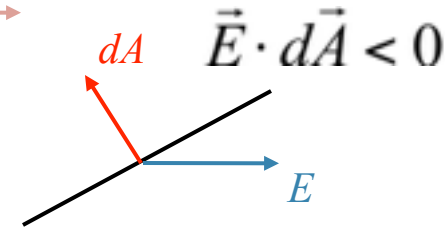
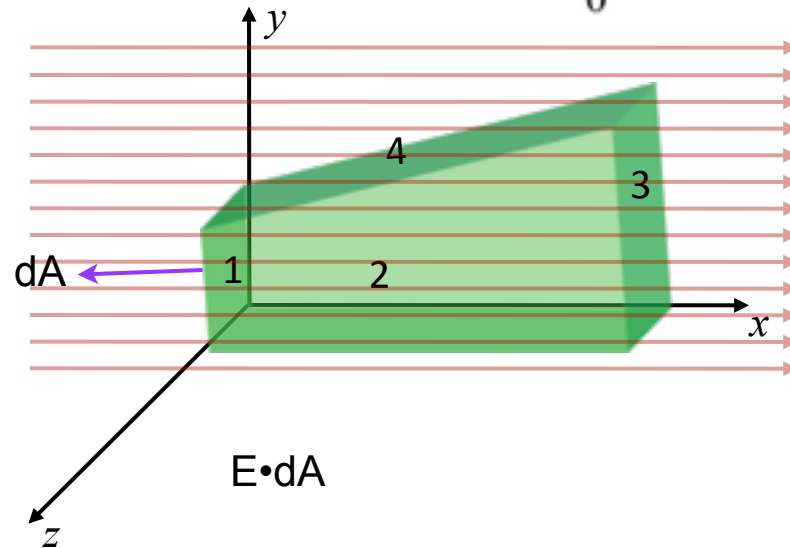
1: $x = 0$

2: $z = +a$

3: $x = +a$

4: slanted

Define Φ_n = Flux through Face n



A) $\Phi_1 < 0$

B) $\Phi_1 = 0$

C) $\Phi_1 > 0$

A) $\Phi_2 < 0$

B) $\Phi_2 = 0$

C) $\Phi_2 > 0$

A) $\Phi_3 < 0$

B) $\Phi_3 = 0$

C) $\Phi_3 > 0$

A) $\Phi_4 < 0$

B) $\Phi_4 = 0$

C) $\Phi_4 > 0$

Clicker Question: Trap. in Constant Field + Q



Label faces:

1: $x = 0$

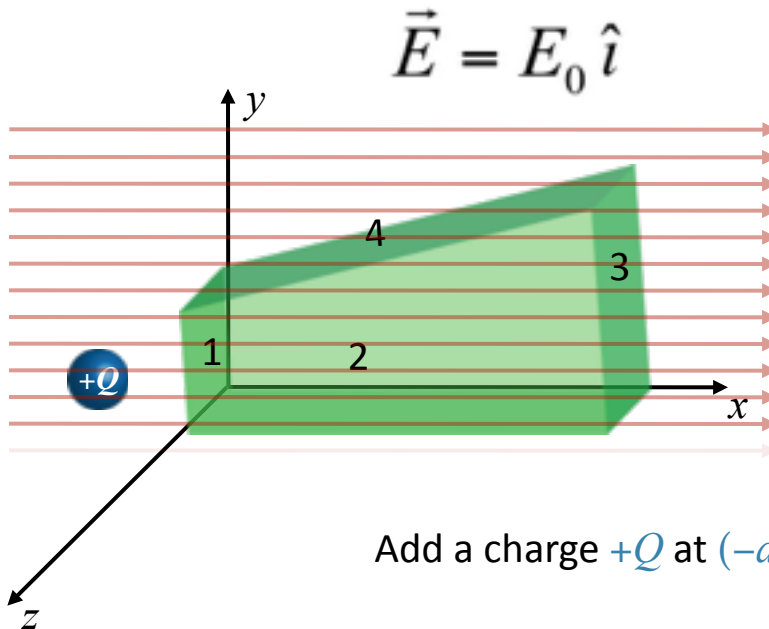
2: $z = +a$

3: $x = +a$

4: slanted

Define Φ_n = Flux through Face n

Φ = Flux through Trapezoid



Add a charge $+Q$ at $(-a, a/2, a/2)$

How does Flux change? (“more negative” is “decreases”, “less negative” is “increases”)

A) Φ_1 increases

B) Φ_1 decreases

C) Φ_1 remains same

A) Φ_3 increases

B) Φ_3 decreases

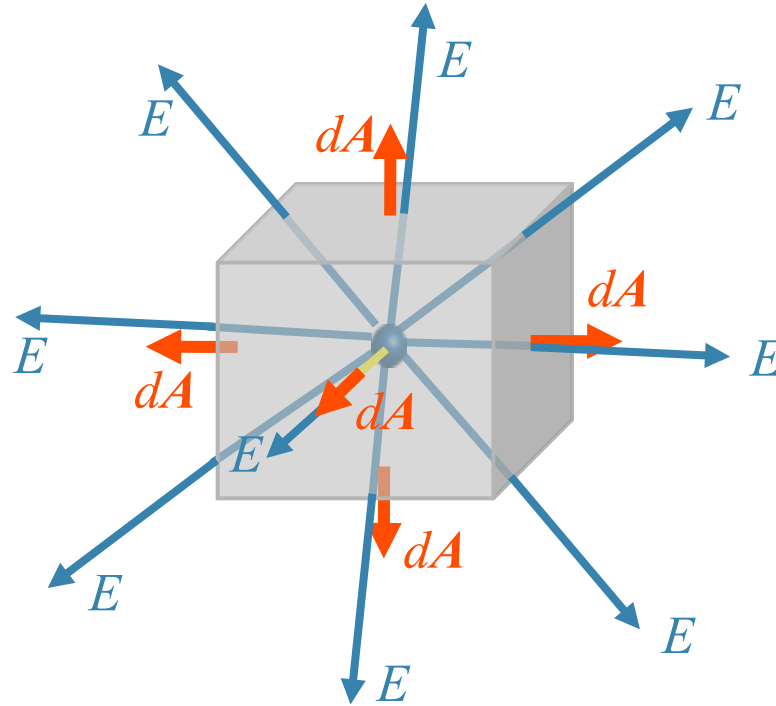
C) Φ_3 remains same

A) Φ increases

B) Φ decreases

C) Φ remains same

Gauss' Law

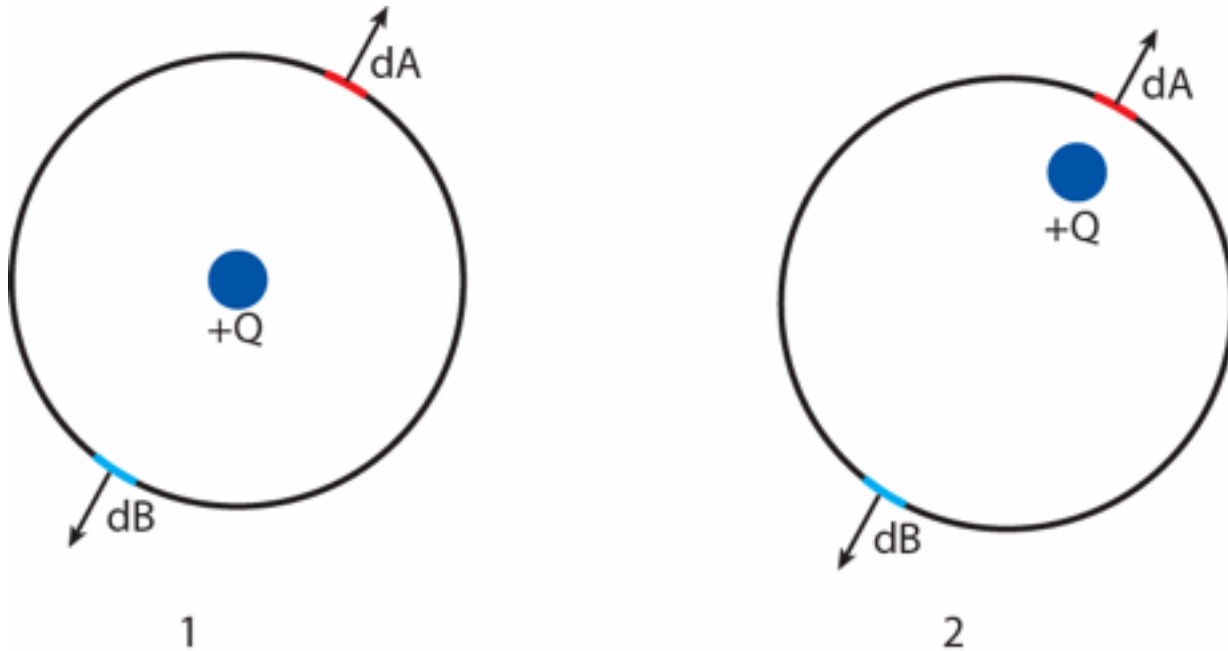


$$\Phi_S = \int_S \vec{E} \cdot d\vec{A} = \frac{Q_{\text{enclosed}}}{\epsilon_0}$$

closed
surface

CheckPoint: Flux from Point Charge (Sphere) 1

A positive charge (blue) is contained inside a spherical shell (black).

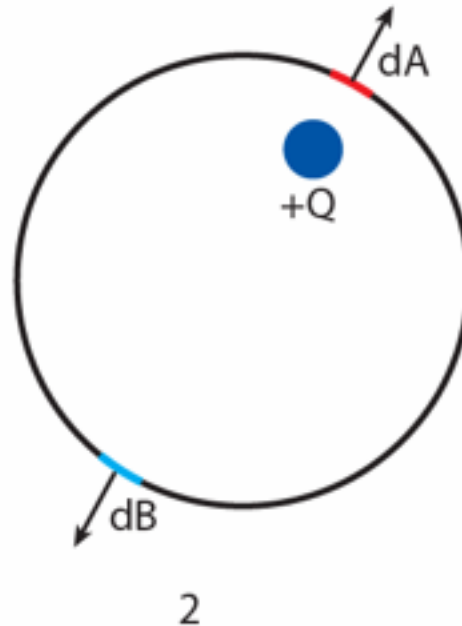
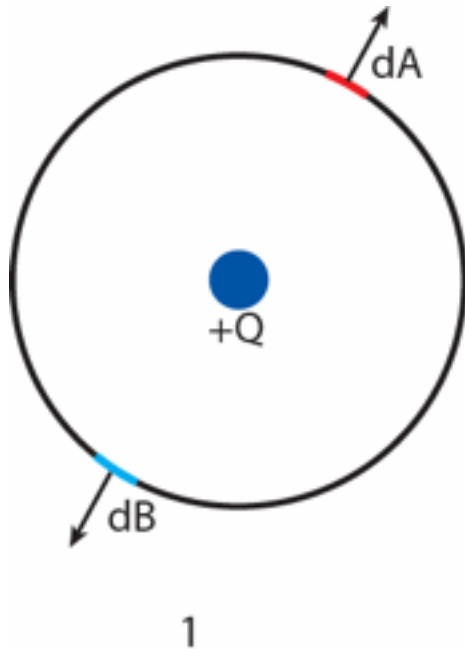


How does the electric flux through the two surface elements, $d\Phi_A$ and $d\Phi_B$ change when the charge is moved from position 1 to position 2?

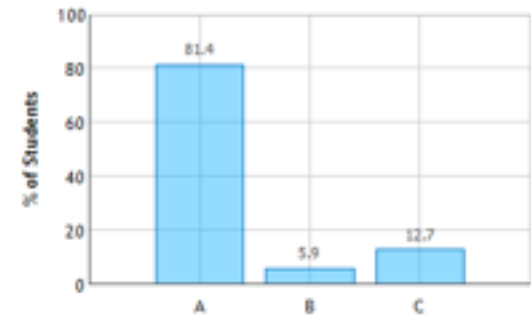
- A) $d\Phi_A$ increases and $d\Phi_B$ decreases
- B) $d\Phi_A$ decreases and $d\Phi_B$ increases
- C) Both $d\Phi_A$ and $d\Phi_B$ do not change

CheckPoint Results: Flux Point Charge (Sphere) 1

A positive charge (blue) is contained inside a spherical shell (black).



Flux from Point Charge Through Surfaces of Sphere: Question 1 (N = 102)

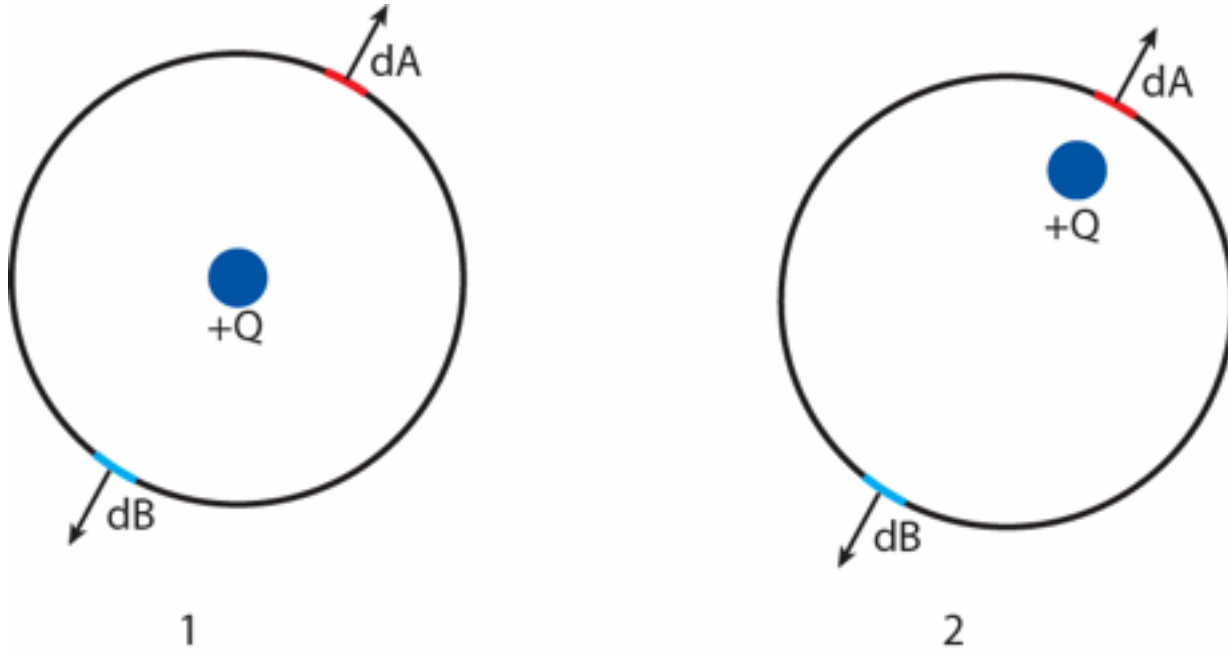


How does the electric flux through the two surface elements, $d\Phi_A$ and $d\Phi_B$ change when the charge is moved from position 1 to position 2?

- A) $d\Phi_A$ increases and $d\Phi_B$ decreases
- B) $d\Phi_A$ decreases and $d\Phi_B$ increases
- C) Both $d\Phi_A$ and $d\Phi_B$ do not change

CheckPoint: Flux from Point Charge (Sphere) 2

A positive charge (blue) is contained inside a spherical shell (black).

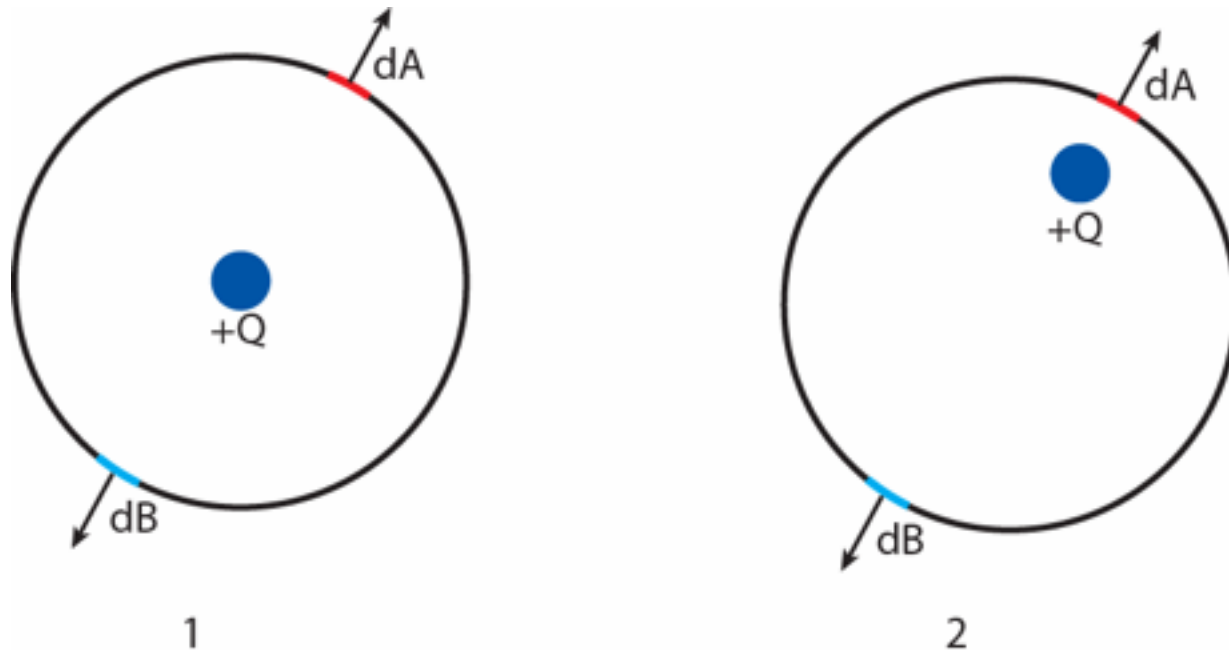


How does the flux Φ_E through the entire surface change when the charge is moved from position 1 to position 2?

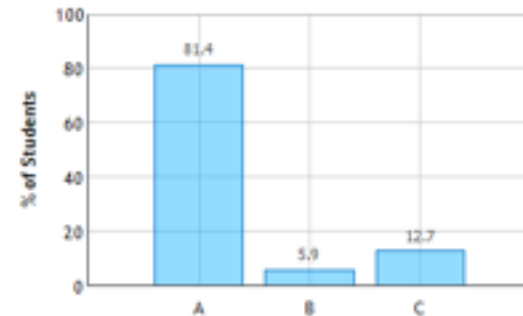
- A) Φ_E increases
- B) Φ_E decreases
- C) Φ_E does not change

CheckPoint Results: Flux Point Charge (Sphere) 2

A positive charge (blue) is contained inside a spherical shell (black).



Flux from Point Charge Through Surfaces of Sphere: Question 1 (N = 102)

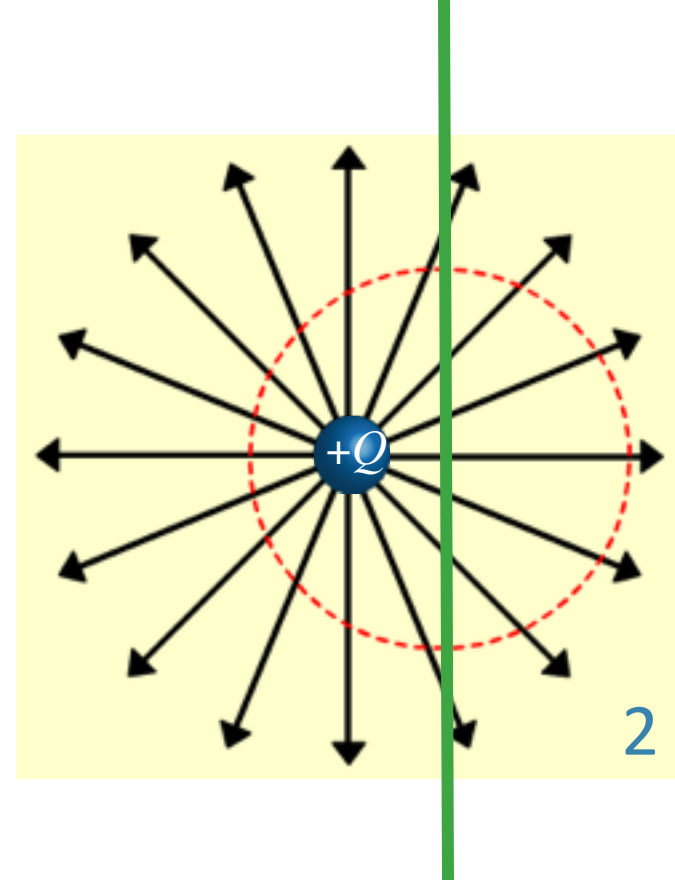
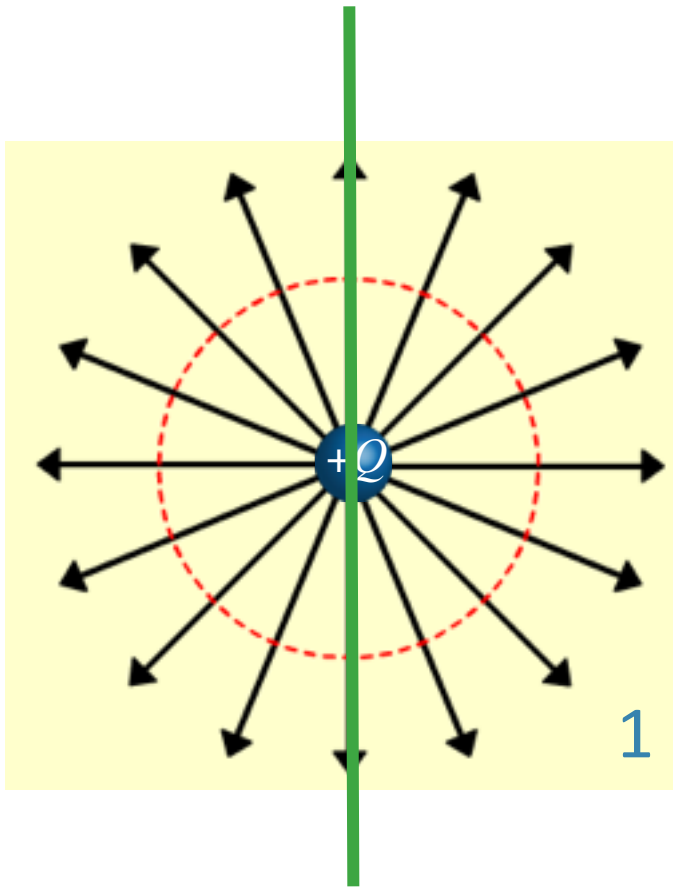


How does the flux Φ_E through the entire surface change when the charge is moved from position 1 to position 2?

- A) Φ_E increases
- B) Φ_E decreases
- C) Φ_E does not change

gauss law refers to the total charge enclosed, regardless of where it is.

Think of it this way:

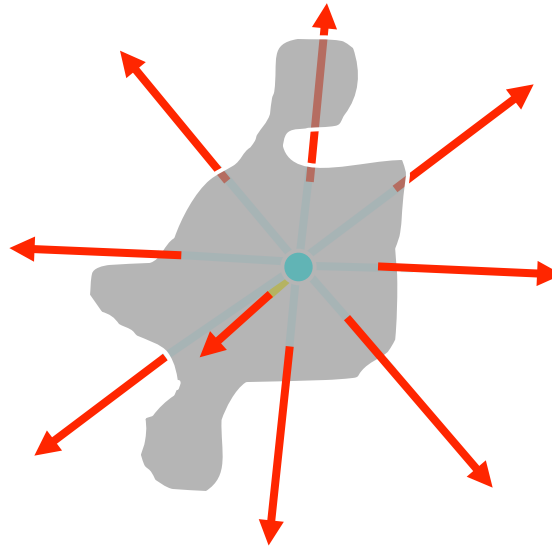
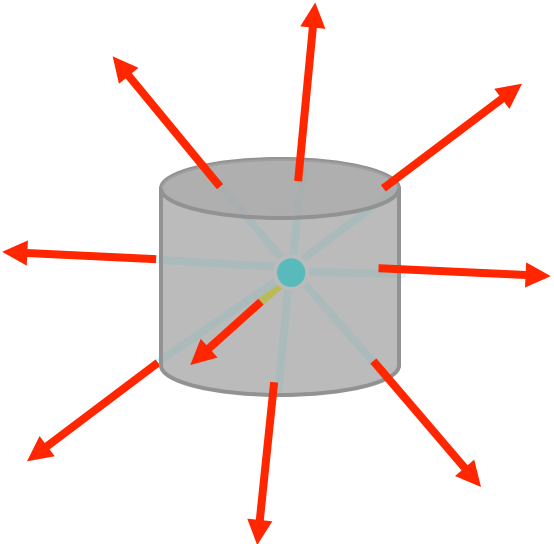
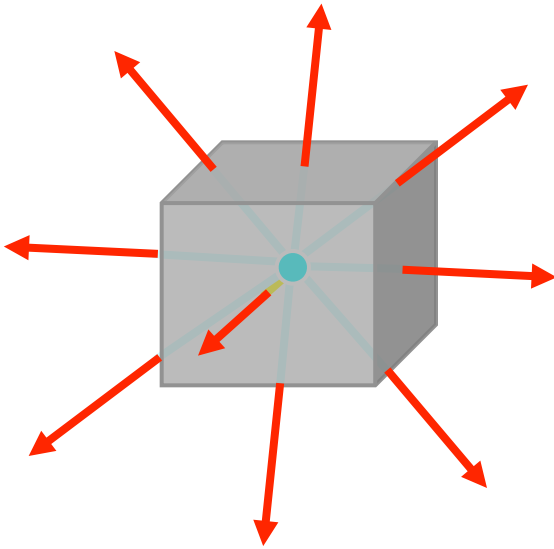


The total flux is the same in both cases (just the total number of lines)
The flux through the right (left) hemisphere is smaller (bigger) for case 2.

Things to notice about Gauss' Law

$$\Phi_S = \int_{\substack{S \\ \text{closed} \\ \text{surface}}} \vec{E} \cdot d\vec{A} = \frac{Q_{\text{enclosed}}}{\epsilon_0}$$

If Q_{enclosed} is the same, the flux has to be the same, which means that the integral must yield the same result for any surface.



Things to notice about Gauss' Law

$$\Phi_S = \int_{\substack{S \\ \text{closed} \\ \text{surface}}} \vec{E} \cdot d\vec{A} = \frac{Q_{\text{enclosed}}}{\epsilon_0}$$

In cases of high symmetry it may be possible to bring E outside the integral. In these cases we can solve Gauss Law for E

$$E \int dA = EA = \frac{Q_{\text{enclosed}}}{\epsilon_0}$$

$$E = \frac{Q_{\text{enclosed}}}{A\epsilon_0}$$

So - if we can figure out Q_{enclosed} and the area of the surface A , then we know E !

This is the topic of the next lecture.

One more thing...

- ★ Is it *Gauss' Law* or *Gauss's Law*?
- ★ Either, but never
... ~~*Gausses Law*~~.